

Name: _____

Coordinate Grid

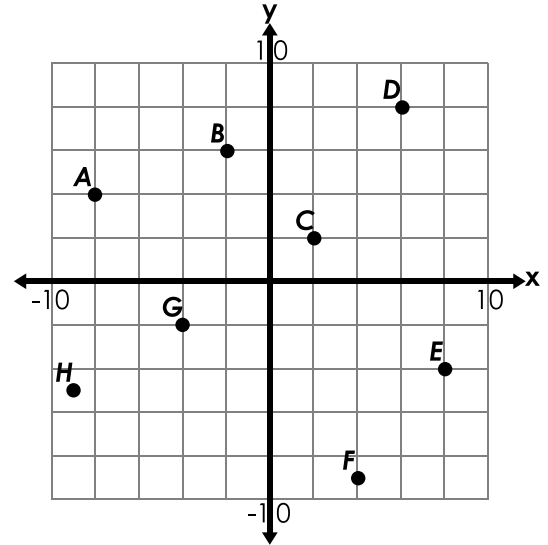
Give the coordinates for the following points.

1. C _____ 2. H _____

3. B _____ 4. E _____

5. G _____ 6. D _____

7. A _____ 8. F _____



Tell which quadrant each of the following points is located in: **I, II, III,** or **IV.**

9. (15, -12) _____ 10. (-9, 17) _____ 11. (20, 10) _____

12. (-6, -23) _____ 13. (30, -8) _____ 14. (-5, -5) _____

15. (18, 10) _____ 16. (-14, -2) _____ 17. (-8, 35) _____

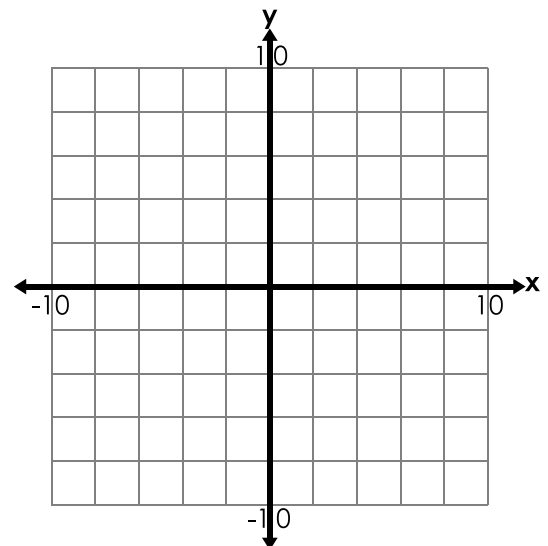
Plot and label the following points.

18. I (8, -4) 19. J (-2, -4)

20. K (-8, 10) 21. L (6, 6)

22. M (-5, -9) 23. N (9, 1)

24. O (-4, 3) 25. P (6, -8)



ANSWER KEY

Coordinate Grid

Give the coordinates for the following points.

1. C (2, 2)

2. H (-9, -5)

3. B (-2, 6)

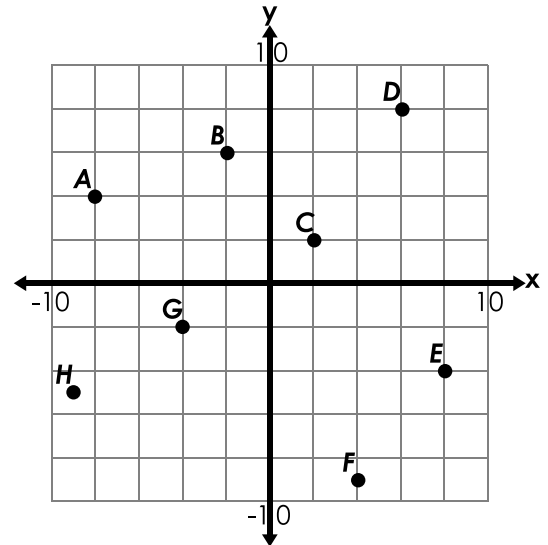
4. E (8, -4)

5. G (-4, -2)

6. D (6, 8)

7. A (-8, 4)

8. F (4, -9)



Tell which quadrant each of the following points is located in: I, II, III, or IV.

9. (15, -12) IV

10. (-9, 17) II

11. (20, 10) I

12. (-6, -23) III

13. (30, -8) IV

14. (-5, -5) III

15. (18, 10) I

16. (-14, -2) III

17. (-8, 35) II

Plot and label the following points.

18. I (8, -4)

19. J (-2, -4)

20. K (-8, 10)

21. L (6, 6)

22. M (-5, -9)

23. N (9, 1)

24. O (-4, 3)

25. P (6, -8)

