


Name: _____

Ordered Pairs in Chess

A chess board is very similar to a coordinate grid. The location of chess pieces are labeled by letter-number ordered pairs.



Write the letter-number combinations that mark the location of the following chess pieces.

 black queen (d, 8)

 white queen _____

 black knights _____ and _____

 white bishops _____ and _____

 white king _____


 black king _____

 black pawns _____

ANSWER KEY

Ordered Pairs in Chess

A chess board is very similar to a coordinate grid. The location of chess pieces are labeled by letter-number ordered pairs.




Write the letter-number combinations that mark the location of the following chess pieces.

 black queen (d, 8)


 white queen (f, 3)

 black knights (c, 6) and (g, 8)

 white bishops (c, 1) and (c, 4)

 white king (e, 1)

 black king (e, 8)

 black pawns (a, 7) (b, 7) (c, 7) (d, 6)
(e, 5) (f, 7) (g, 7) (h, 7)