

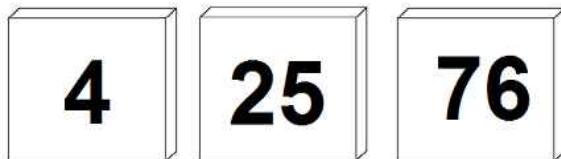
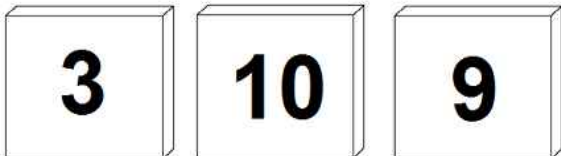
Mixed Math: B-3

1. Kari has 17 roses and 9 tulips. How many more roses than tulips does she have?

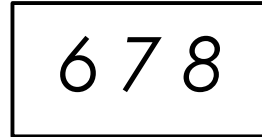
Show your work and label your answer.

answer: _____

2. Color only the tiles that have odd numbers.



- 3.



Which digit is in the tens place? _____

Which digit is in the ones place? _____

Which digit is in the hundreds place? _____

4. Dan has 6 sea shells. Caitlin has 7 shells. Travis has 9. Sara has 2. How many shells do they have altogether?

Show your work and label your answer.

answer: _____